

CAMBRIDGE INTERNATIONAL EXAMINATIONS  
General Certificate of Education  
Advanced Subsidiary Level and Advanced Level

**GEOGRAPHY**

**9696/01**

Paper 1 Core Geography

May/June 2003

**3 hours**

INSERT

**READ THESE INSTRUCTIONS FIRST**

This insert contains all the Figures referred to in the questions.

This document consists of **6** printed pages and **2** blank pages.

Fig. 1 for Question 1

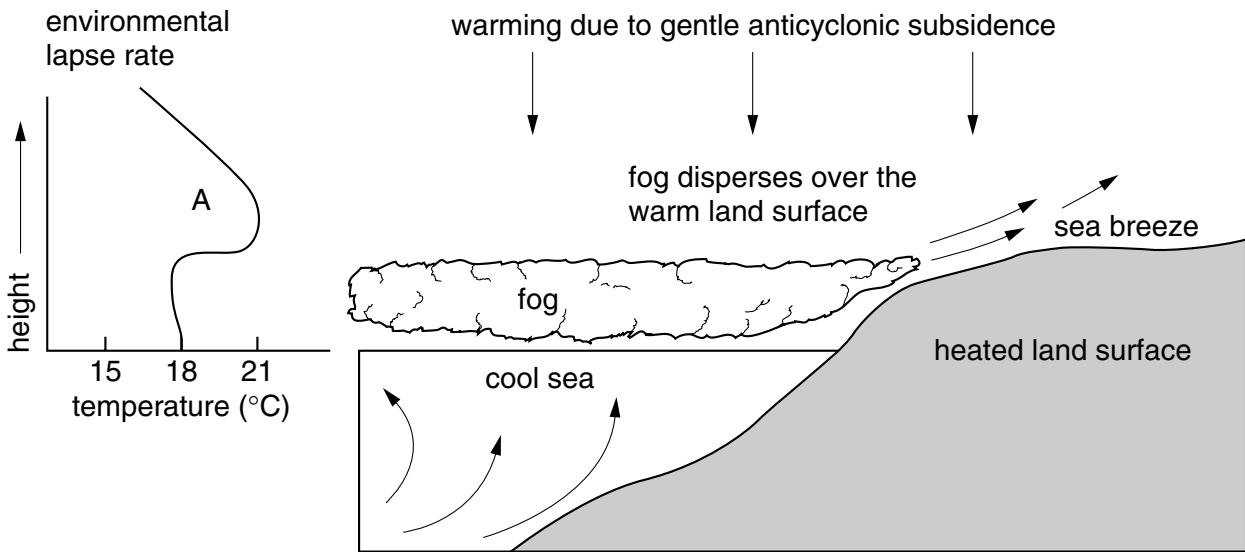
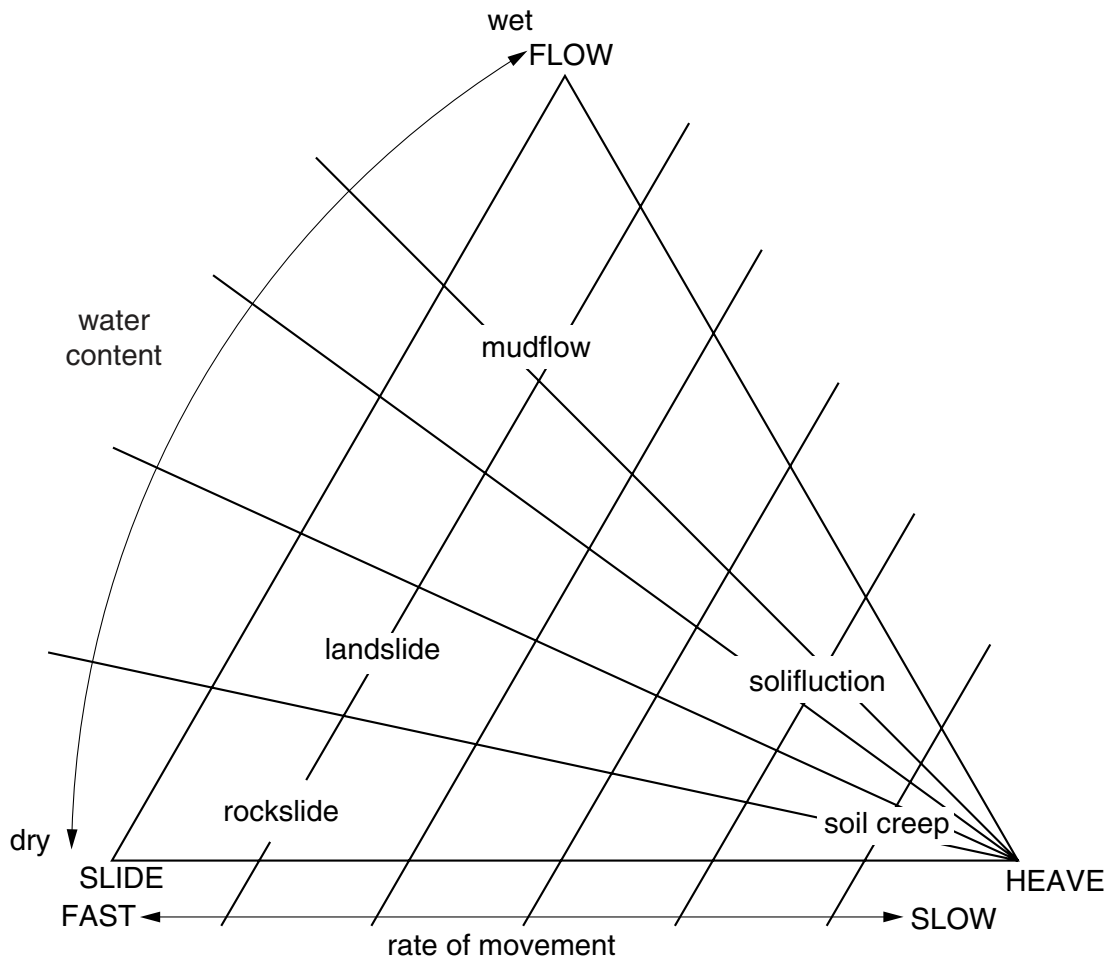


Fig. 2 for Question 2



**Figs 3A, 3B and 3C for Question 3**

**Age/sex pyramids for Singapore**

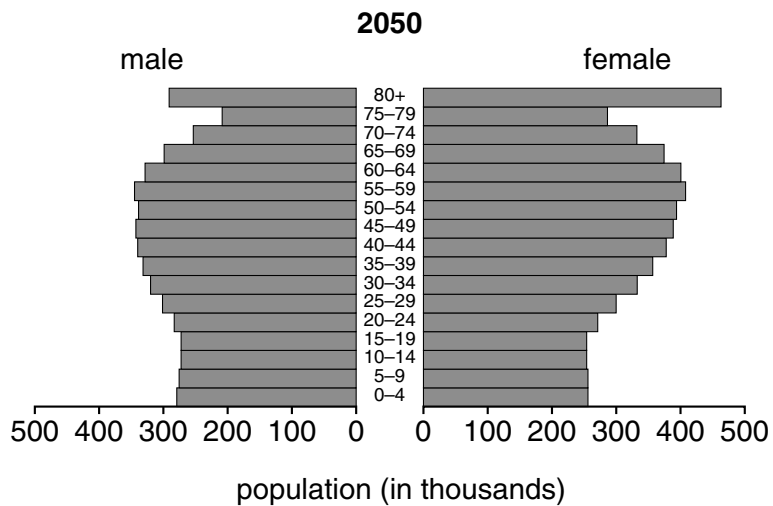
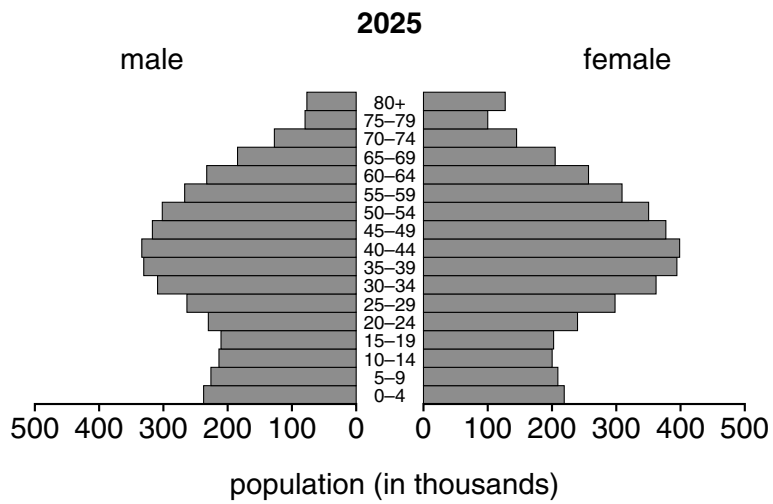
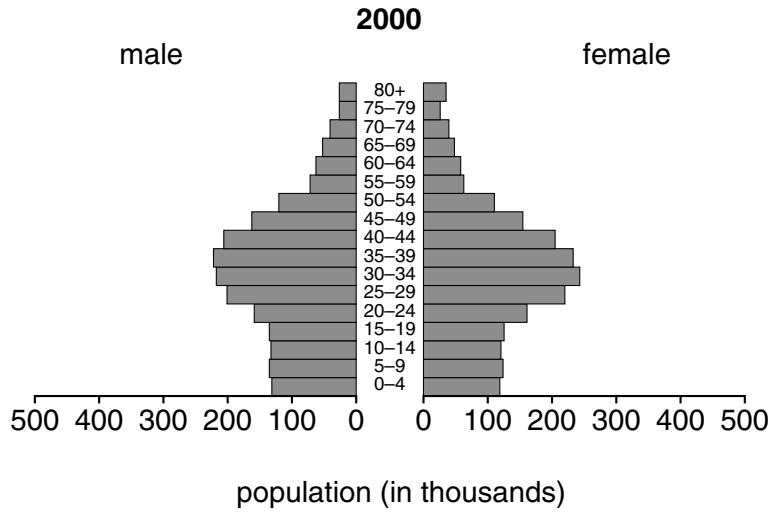


Table 1 for Question 4

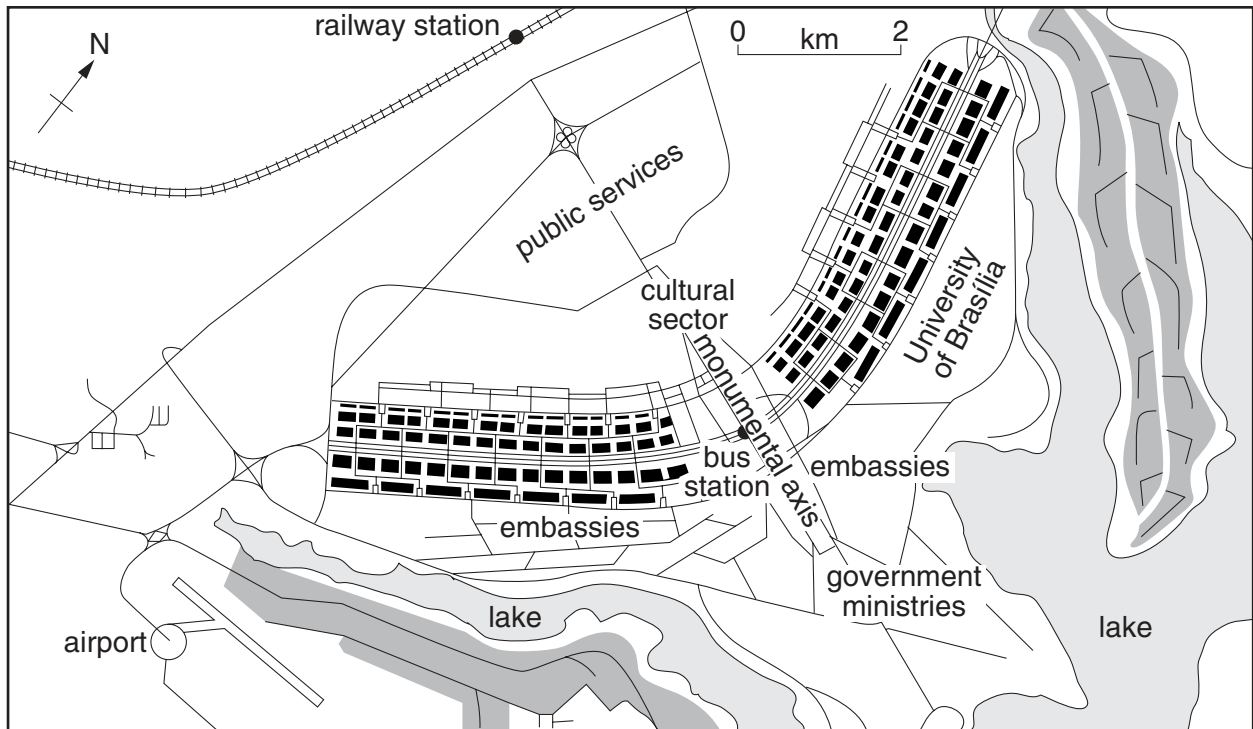
**Total urban population and percentage urban population in more developed and less developed regions in 1970, 1994 and 2025**

Region	total urban population (millions)			percentage urban population		
	1970	1994	2025	1970	1994	2025
<i>More developed regions</i>	677	868	1040	67.5	74.7	84.0
Australia-New Zealand	13	18	26	84.4	84.9	89.1
Europe	423	532	598	64.4	73.3	83.2
Japan	74	97	103	71.2	77.5	84.9
North America	167	221	313	73.8	76.1	84.8
<i>Less developed regions</i>	676	1653	4025	25.1	37.0	57.0
Africa	84	240	804	23.0	33.4	53.8
Asia <sup>a</sup>	428	1062	2615	21.0	32.4	54.0
Latin America	163	349	601	57.4	73.7	84.7
Oceania <sup>b</sup>	1	2	5	18.0	24.0	40.0

Notes: a. excluding Japan, b. excluding Australia and New Zealand.

Fig. 4 for Question 5

## The layout of Brasília



- key**
- high rise residential / commercial
  - residential area
  - road

Fig. 5 for Question 9

## The demographic transition model

